

Friday 29<sup>th</sup> January 2021

Hello everyone,

What a brilliant week filled with some fantastic learning! I am so proud of all you are doing. Your postcards and writing are brilliant! Well done everyone!

Here's the home learning today. Don't forget our zoom at 11am and to bring along your favourite book.

See you all soon!

Mrs Cole



## Subject Resources List

### Handwriting:

- Whiteboard
- Whiteboard pen
- OR
- Pencil
- Exercise Book/Paper

### Phonics:

- Whiteboard
- Whiteboard pen
- Pencil
- Exercise book
- GROUP 2: a tie

### Maths:

- Pencils
- Paper
- Exercise book
- Whiteboard
- Whiteboard pen
- Number line (you could use a ruler)

### Geography and computing:

- Your grid with the measured rainfall
- A device to make a bar chart on (see weblink in task box)

Handwriting  
(10 minutes)

Can you practice the letter **h**?

Try writing:

h


hat

hello

Hannah

Hello said Hannah who was wearing a hat.

This video might help:



<https://www.youtube.com/watch?v=c5O-WtwwRfc>

Phonics Group  
1 (20-30  
minutes)

Today we are learning the 'ou' digraph. Watch the Phonics Fairy reading the story below:



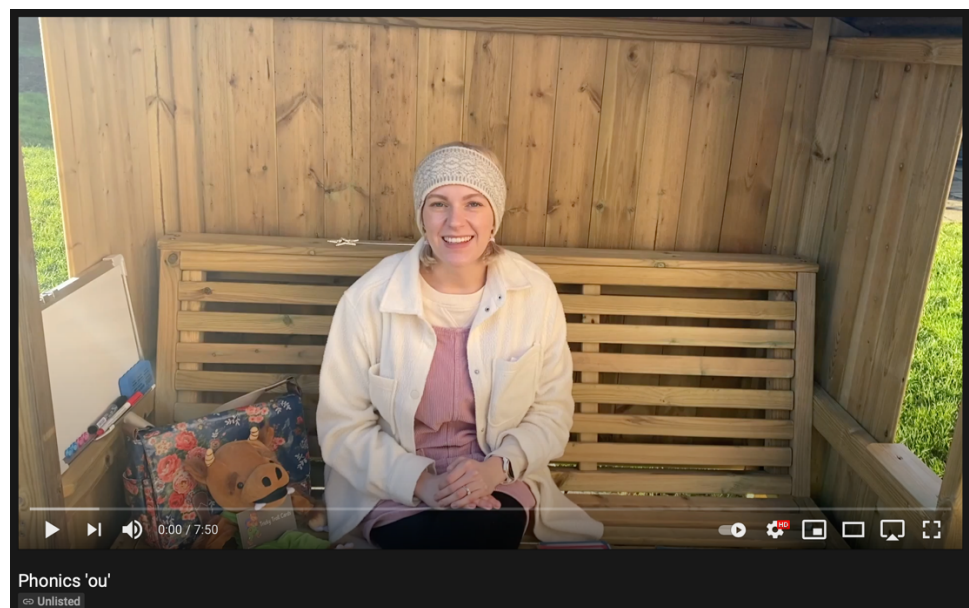
Login details:

<https://ttsstorytimephonics.co.uk/>

Username: Spørle Primary

Password: XA\$li@VB!QM8NqSh8iyeQHMg

Watch the teaching video below:

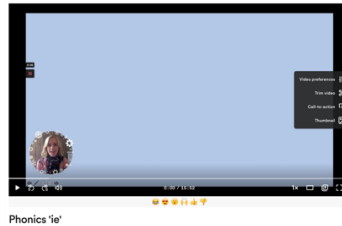


<https://www.youtube.com/watch?v=kx6QU2rk8OU>

Phonics Group  
2 (20-30  
minutes)

Today we are learning the 'ie' digraph. Watch the teaching video below (put a tie on if you have one!):

i-e/ie



ie ie tighten my tie

<https://www.loom.com/share/07ffc391e807467b8575905176c9aea>  
[a](#)

### Task:

Fill in the missing words in the sentences from the list.

Baby Bear \_\_\_\_\_ when he saw all of his porridge had gone.

Goldilocks \_\_\_\_\_ she had eaten it, but the Jolly Postman had  
\_\_\_\_\_ her.

"It's not nice to \_\_\_\_\_", he said.

"I'm sorry," she \_\_\_\_\_. "It was me. I \_\_\_\_\_ all the bowls and yours was  
the best."

"That's ok," said Baby Bear, "I prefer apple \_\_\_\_\_ and custard anyway!"

### Missing words:

pie

denied

spied

tried

cried

lie

replied


Today in maths we are consolidating how to compare addition and subtraction questions.


Choose either **Task 1 (slightly simplified)** or **Task 2 (for those that are confident)** and complete the two questions about fact families.


**Task A:**

1)

Draw counters to show each addition.  
Use two different colours.

a)  $9 + 3$  

b)  $6 + 7$  

c)  $11 + 2$  


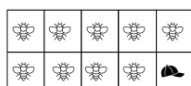
2)

Write the missing phrase.

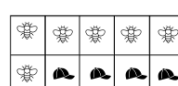
*less than*

*greater than*

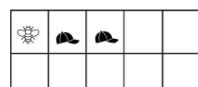
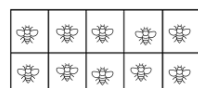
*equal to*



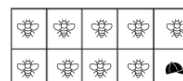
$9 + 3$



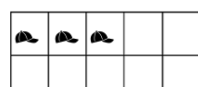
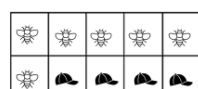
$6 + 7$



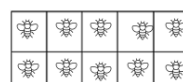
$11 + 2$



$9 + 3$



$6 + 7$



$11 + 2$

Can you also put the correct symbols?  $< > =$

### Task B:

1)

Draw counters to show each addition.

Use two different colours.

a)

$9 + 3$


b)

$6 + 7$


c)

$11 + 2$


d) Write the missing phrase.

less than

greater than

equal to

$9 + 3$  is \_\_\_\_\_  $6 + 7$

$11 + 2$  is \_\_\_\_\_  $9 + 3$

$6 + 7$  is \_\_\_\_\_  $11 + 2$

2)

Cross out counters to show each subtraction.

$14 - 5$

●	●	●	●	●		●	●	●	●	
●	●	●	●	●						

$15 - 6$

●	●	●	●	●		●	●	●	●	●
●	●	●	●	●						

Write the missing phrase.

less than

greater than

equal to

$14 - 5$  \_\_\_\_\_  $15 - 6$

3)

Write  $<$ ,  $>$  or  $=$  to compare the number sentences.

a)  $12 + 3$    $12 - 3$

b)  $17 - 4$    $17 - 6$

c)  $13 + 6$    $6 + 13$

d)  $14 - 4$    $1 + 0$

Did you have to work them all out?

Literacy (15 minutes)

### *Lost and Found Topic*

#### *Task:*

*To continue writing your journey in your postcard. Write at least 2 more sentences about your journey and what happened. Remember to finish your postcard by writing a final sentence and say who it's from (e.g., Love from your boy).*





Geography  
and  
Computing (20  
minutes)

Comparing rainfall and making a bar chart  
Watch the teaching video below:



Creating a bar chart with our rainfall data

<https://www.loom.com/share/c143498d15784605b1f6042f9d72446e>

**Task:**

Make a bar chart like Mrs Cole's in the video  
using your own data collected or the data here:

Thursday	Friday	Saturday	Sunday	Monday	Tuesday	Wednesday
0ml	0ml	0ml	59ml	38ml	24ml	68ml

Here is the website:

[https://nces.ed.gov/nceskids/graphing/classic/barpie\\_data.asp?ChartType=bar](https://nces.ed.gov/nceskids/graphing/classic/barpie_data.asp?ChartType=bar)

Remember these internet safety rules:

#### Internet Safety Rules

Always ask a grown-up for help if you see anything strange or unusual.

Don't download or install anything without asking a grown-up first.

Remember, not all games and videos are for children.

Don't talk to strangers online and don't tell them where you live.

If you are ever unsure what to do, remember  
Buddy's song, and always ask for help!



Don't forget to send me a picture of your bar  
chart!

Story time/  
Dough Disco

Join me at 11am on zoom for Story Time with Mrs Cole! I am looking forward to seeing you all and reading a hilarious story!

Cosmic Kids  
Yoga/Singing

If you would like to, join in with the Cosmic Kids Yoga:



<https://www.youtube.com/watch?v=KAT5NiWHFIU>