

Monday 25<sup>th</sup> January 2021

Good morning everyone! I hope you enjoyed your rest over the weekend and enjoyed the Winter weather!

Mrs Hoddy

### **Subject Resources List**

#### **Handwriting:**

- Whiteboard
- Whiteboard pen
- OR
- Pencil
- Exercise Book/Paper

#### **Phonics:**

- Whiteboard
- Whiteboard pen
- Pencil
- Exercise book
- GROUP 2: Some gloop made from cornflour and water

#### **Maths:**

- Pencils
- Paper
- Exercise book
- Number line (you could use a ruler)
- Tens frame
- 20 items (10 one item and 10 another)

#### **Literacy:**

- Pencil
- Exercise book

#### **Geography:**

- Jug with millilitres
- 7-day grid
- Pencil

#### **RE and Art:**

- Craft items for collage (e.g., tissue paper, coloured paper, pasta, wrapping paper) – see picture in the RE task box.

Handwriting  
g (10  
minutes)


Can you practice the letter **y**?

Try writing:

y  
yeti  
yellow  
chilly

The yellow yeti felt chilly.

This video might help:



<https://www.youtube.com/watch?v=Rhdda6k7BQ0>

Phonics Group  
1 (20-30  
minutes)

Today you are  
starting  
Phase 5

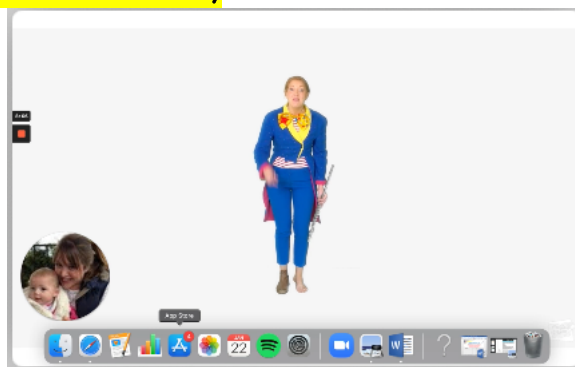
Today we are learning the 'o-e' split digraph.  
Watch the teaching video below with Mrs Cole,  
Robin Class Teacher at Sporle (ignore the date)



<https://www.youtube.com/watch?v=cIgClkoxJw0>

Phonics Group  
2 (20-30  
minutes)

Today we are learning the 'u-e' split digraph  
(the alternative spelling for the long 'oo' sound  
like 'book').



<https://www.loom.com/share/c6feb66a31db42678bf35bf7172c832c>

**Task:**

Watch the video and practice segmenting and  
blending words with the u-e split digraph.

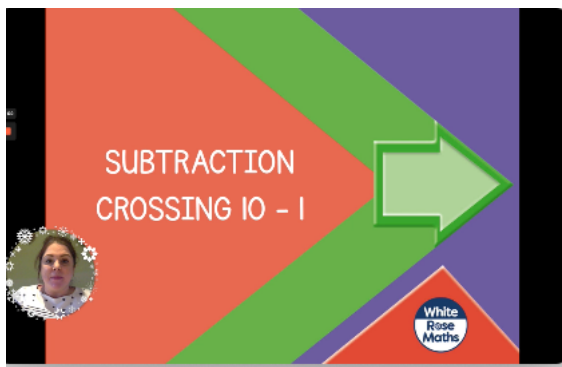
You could write these words in gloop (cornflour  
and water)!

Maths (20  
minutes)

Today in maths we are practising to subtract by  
crossing 10 and using a number line.


Watch the teaching video:

<https://www.loom.com/share/2c751319082a46798f54e6710e48b3de>



**Task:**

- 1 Rosie has 15 cakes.



Her friends eat 6 cakes.

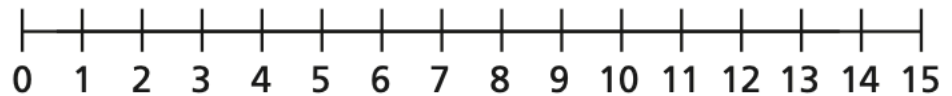
How many cakes does Rosie have left?



- 2 Jack has 13 stickers.

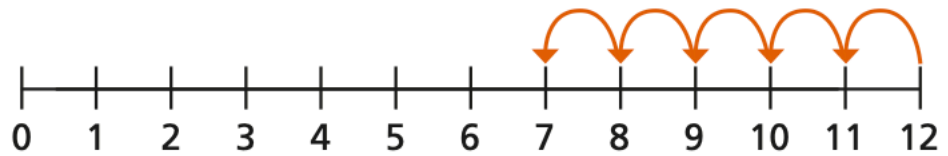
He gives 7 stickers to Dora.

How many stickers does Jack have left?

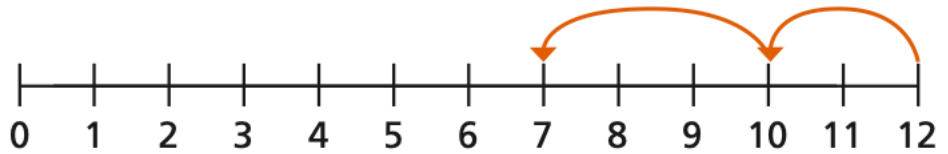


- 3** Ron and Eva have worked out  $12 - 5$  on a number line.

**Ron's method**



**Eva's method**



- a) What is the same and what is different?
- b) Use Eva's method to work out the subtractions.

$$12 - 6$$

$$15 - 8$$

$$14 - 9$$

*Extension question:*

*Can you write your own subtraction question?*

Geography (5 minutes)

*Measuring rainfall: measure today's rainfall in millilitres on your 7 day grid at the end of the day.*

| Thursday | Friday | Saturday | Sunday | Monday | Tuesday | Wednesday |
|----------|--------|----------|--------|--------|---------|-----------|
|          |        |          |        |        |         |           |

SPaG (15 minutes):

*SPaG: using an exclamation mark*

# MR THORNE DOES GRAMMAR

0:13 / 3:37

Exclamation Marks - Mr Thorne Does Grammar

<https://www.youtube.com/watch?v=d8zgNFZ7Mxs>

## Task:

Read these sentences aloud. Decide whether these sentences need a fullstop or an exclamation mark?

- 1) The giant shouted fee fi fo fum
- 2) Jack crept out of the kitchen
- 3) Quick get the axe
- 4) The giant commanded the harp to play
- 5) Jack's mum cried faster

RE and Art (25  
minutes)

## Shabbat:

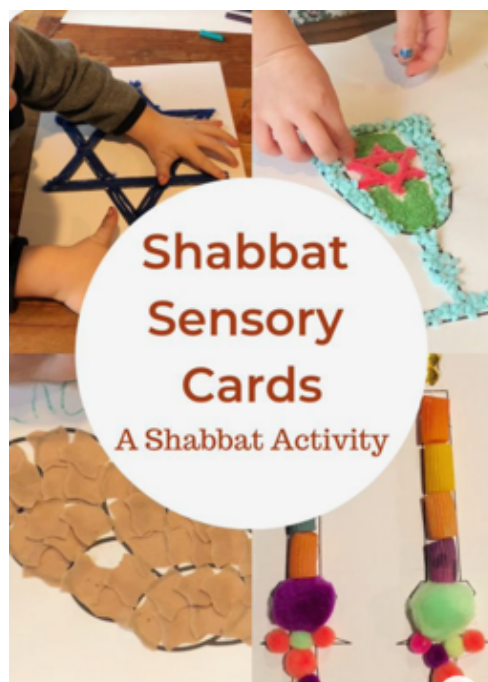
Watch the video:

<https://www.loom.com/share/148b6c57ac5e4f66abab0c31a83eebb9>



**Task:**

Make a collage of the main 3 components of Shabbat: Shabbat candles, Challah bread and a Kiddush cup.



**Story time/**  
Dough Disco

Watch the story time video below (I hope you enjoy!) How is it similar to Jack and the Beanstalk?



[https://www.youtube.com/watch?v=Da6lxY\\_8jmU](https://www.youtube.com/watch?v=Da6lxY_8jmU)